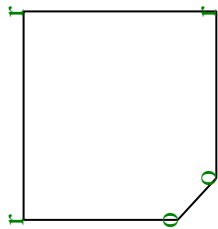




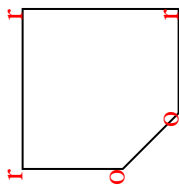


Count the number of Acute, Obtuse and Right angles inside each shape.

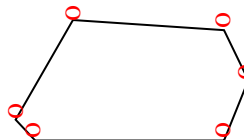
Ex)



1)



2)



Answers

Ex. 0 2 3

1. 0 2 3

2. 0 6 0

3. 0 6 0

4. 0 8 0

5. 1 4 0

6. 2 2 0

7. 1 1 2

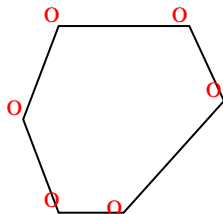
8. 0 7 0

9. 1 2 1

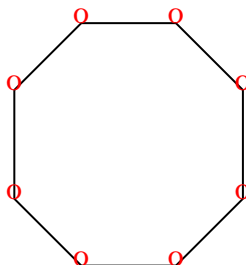
10. 0 0 4

11. 2 0 1

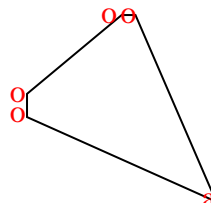
3)



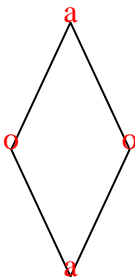
4)



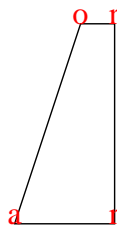
5)



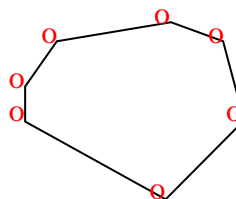
6)



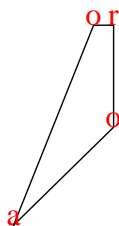
7)




8)



9)



10)



11)

